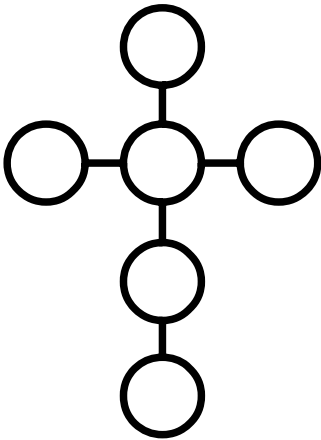


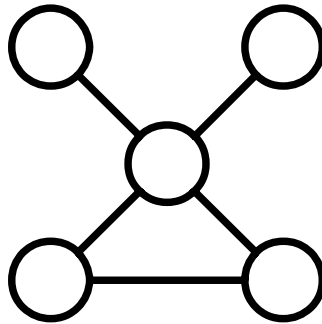
Power Lines (2)

Place each number in a circle so that all the numbers in the same straight line add up to the power line total.



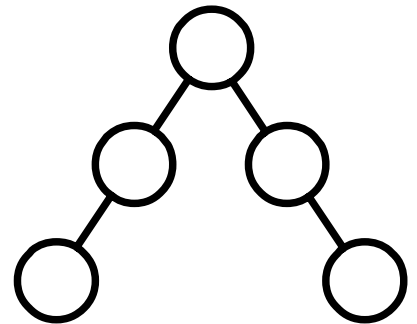
Use 7, 14, 21, 28, 35, 42

Power Line total = 84



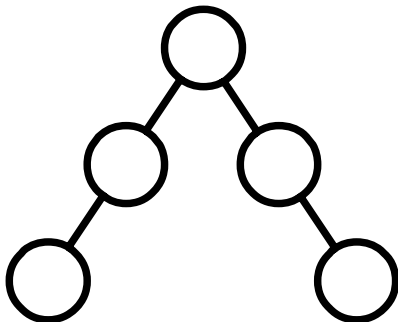
Use 14, 28, 56, 70, 84

Power Line total = 154



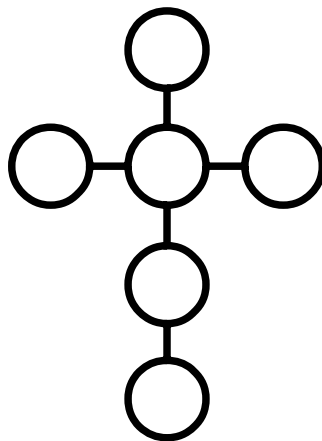
Use 26, 39, 52, 65, 78

Power Line total = 169



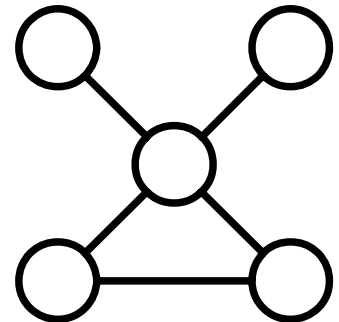
Use 4, 6, 8, 10, 12

Power Line total = 26



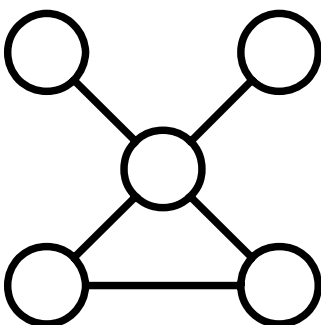
Use 2, 4, 6, 8, 10, 12

Power Line total = 24



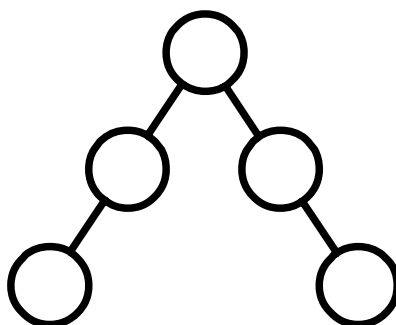
Use 15, 30, 60, 75, 90

Power Line total = 165



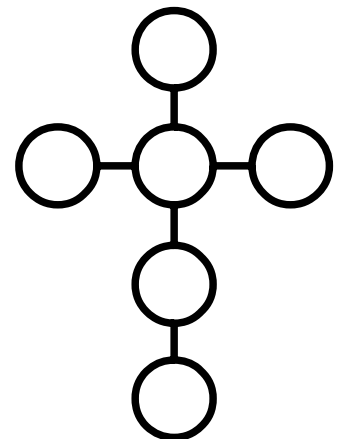
Use 16, 17, 19, 20, 21

Power Line total = 26



Use 6, 9, 12, 15, 18

Power Line total = 39



Use 12, 24, 36, 48, 60, 72

Power Line total = 144