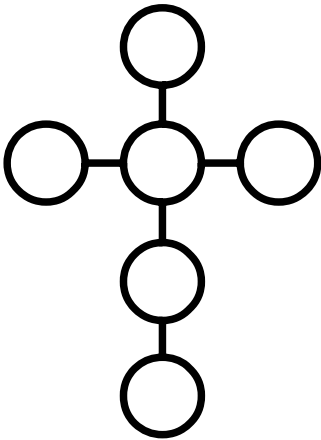


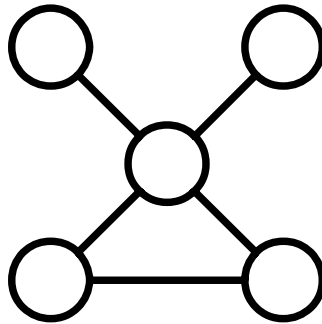
Power Lines (2)

Place each number in a circle so that all the numbers in the same straight line add up to the power line total.



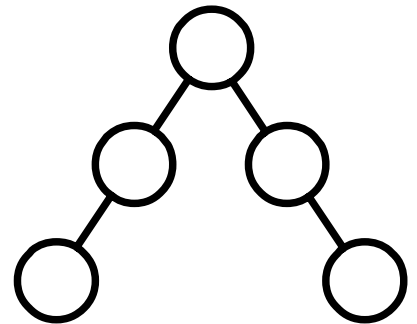
Use 10, 20, 30, 40, 50, 60

Power Line total = 120



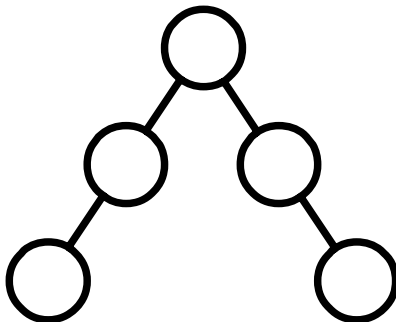
Use 3, 6, 12, 15, 18

Power Line total = 33



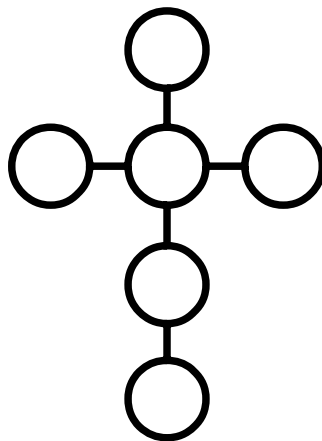
Use 24, 36, 48, 60, 72

Power Line total = 156



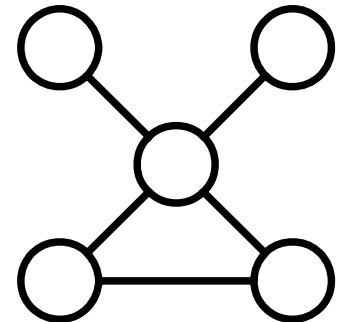
Use 14, 21, 28, 35, 42

Power Line total = 91



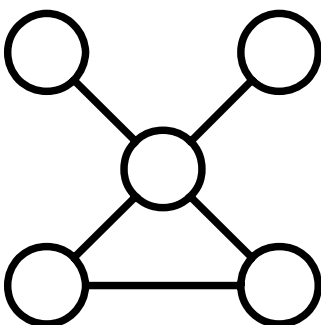
Use 8, 16, 24, 32, 40, 48

Power Line total = 96



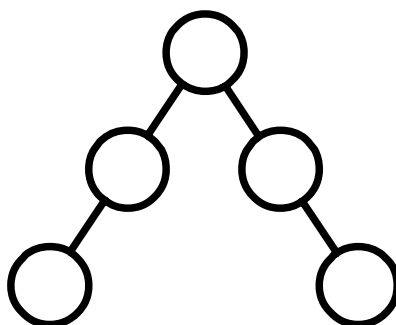
Use 6, 7, 9, 10, 11

Power Line total = 16



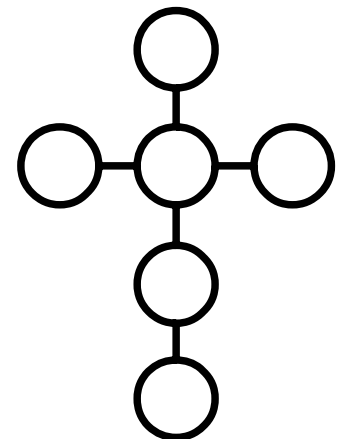
Use 15, 30, 60, 75, 90

Power Line total = 165



Use 10, 15, 20, 25, 30

Power Line total = 65



Use 6, 12, 18, 24, 30, 36

Power Line total = 72