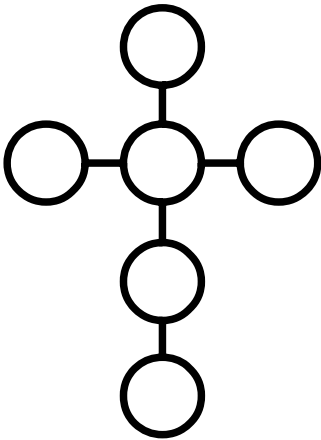


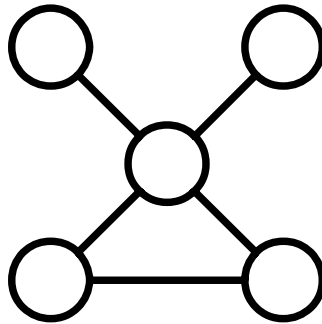
Power Lines (2)

Place each number in a circle so that all the numbers in the same straight line add up to the power line total.



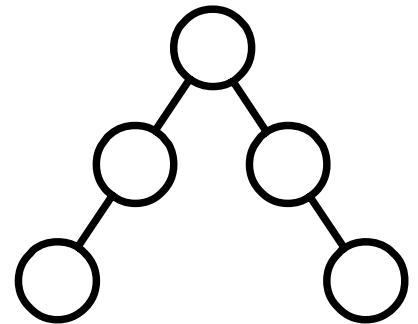
Use 12, 24, 36, 48, 60, 72

Power Line total = 144



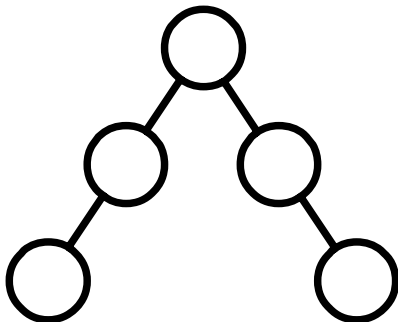
Use 5, 10, 20, 25, 30

Power Line total = 55



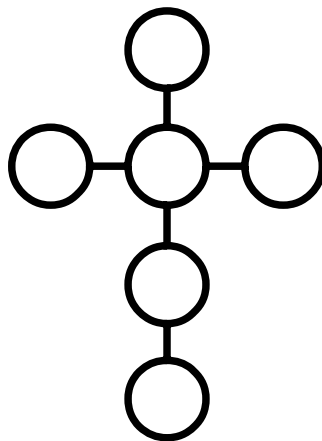
Use 8, 12, 16, 20, 24

Power Line total = 52



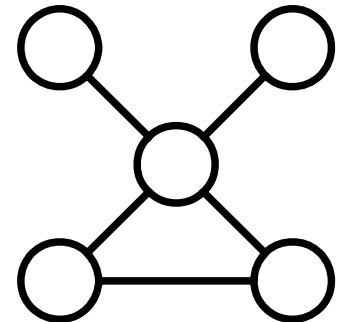
Use 24, 36, 48, 60, 72

Power Line total = 156



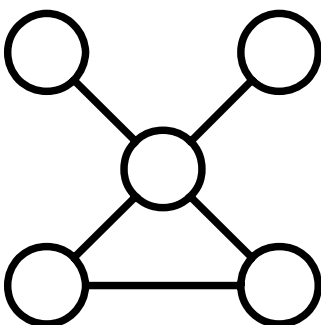
Use 6, 12, 18, 24, 30, 36

Power Line total = 72



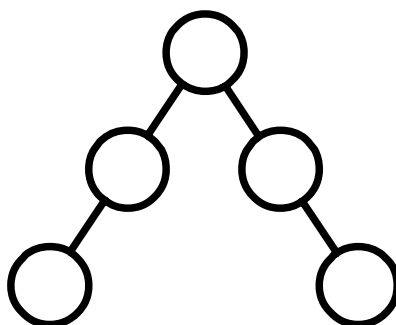
Use 3, 6, 12, 15, 18

Power Line total = 33



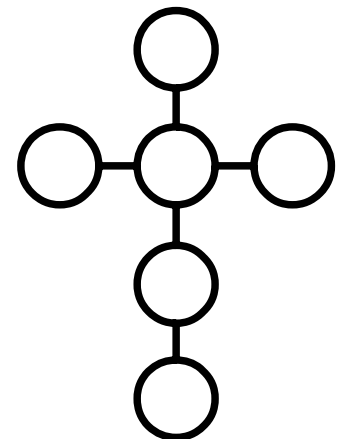
Use 11, 22, 44, 55, 66

Power Line total = 121



Use 4, 6, 8, 10, 12

Power Line total = 26



Use 9, 18, 27, 36, 45, 54

Power Line total = 108