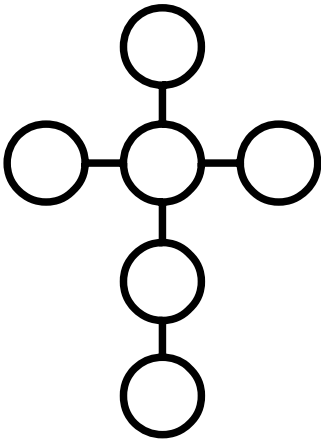


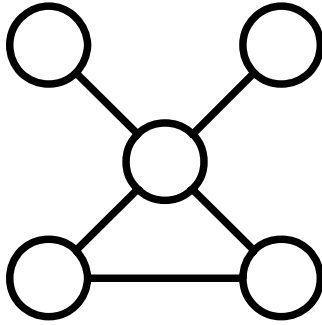
Power Lines (2)

Place each number in a circle so that all the numbers in the same straight line add up to the power line total.



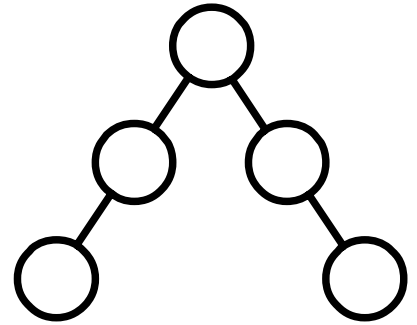
Use 11, 22, 33, 44, 55, 66

Power Line total = 132



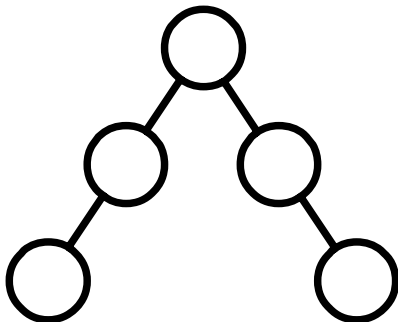
Use 2, 3, 5, 6, 7

Power Line total = 12



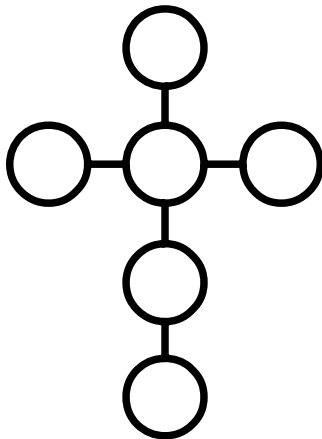
Use 22, 33, 44, 55, 66

Power Line total = 143



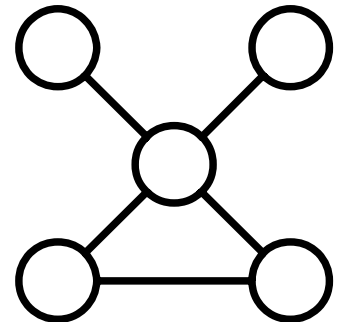
Use 14, 21, 28, 35, 42

Power Line total = 91



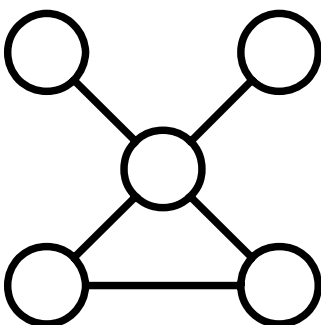
Use 10, 20, 30, 40, 50, 60

Power Line total = 120



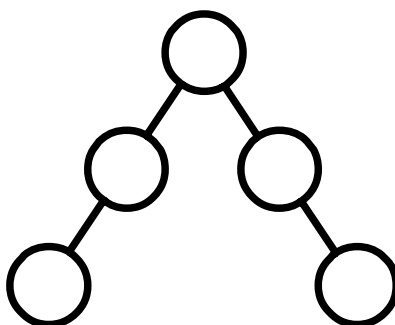
Use 5, 10, 20, 25, 30

Power Line total = 55



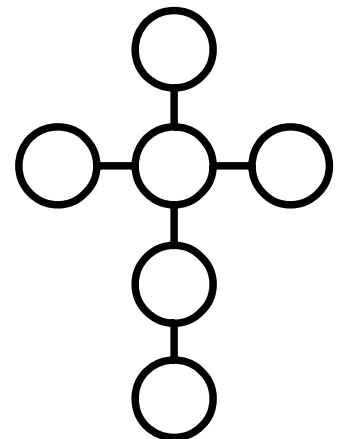
Use 13, 14, 16, 17, 18

Power Line total = 23



Use 28, 42, 56, 70, 84

Power Line total = 182



Use 8, 16, 24, 32, 40, 48

Power Line total = 96