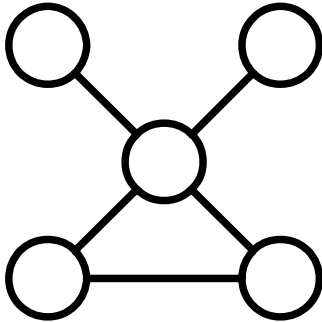


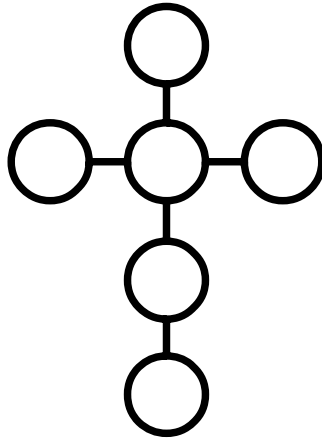
# Power Lines (1)

Place each number in a circle so that all the numbers in the same straight line add up to the power line total.



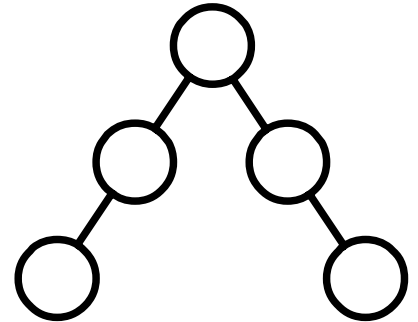
Use 2, 4, 8, 10, 12

Power Line total = 22



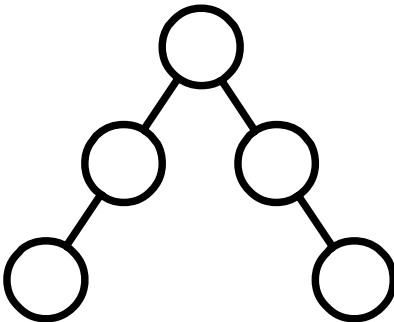
Use 3, 6, 9, 12, 15, 18

Power Line total = 36



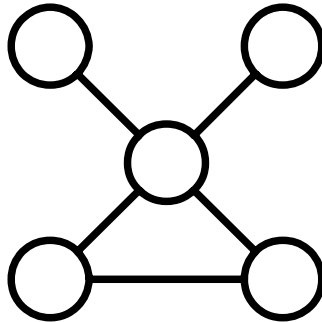
Use 8, 12, 16, 20, 24

Power Line total = 52



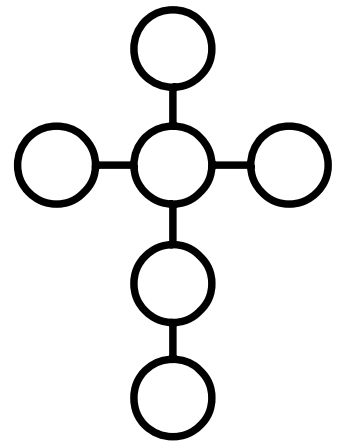
Use 2, 3, 4, 5, 6

Power Line total = 13



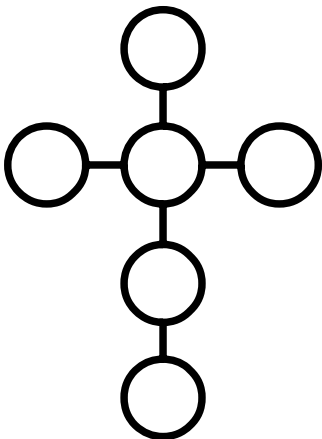
Use 8, 16, 32, 40, 48

Power Line total = 88



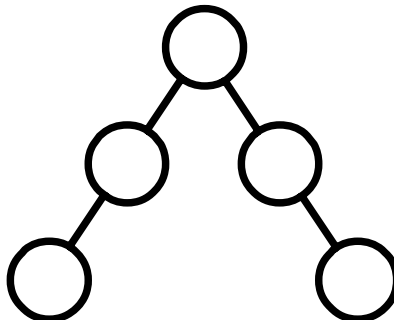
Use 1, 2, 3, 4, 5, 6

Power Line total = 12



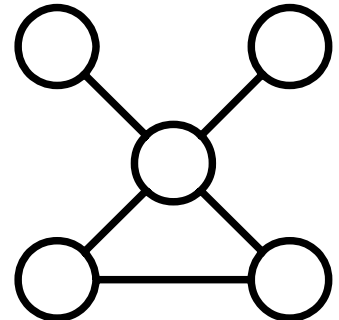
Use 4, 8, 12, 16, 20, 24

Power Line total = 48



Use 14, 21, 28, 35, 42

Power Line total = 91



Use 4, 8, 16, 20, 24

Power Line total = 44