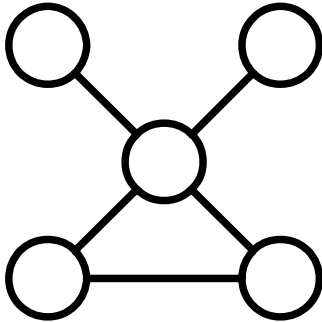


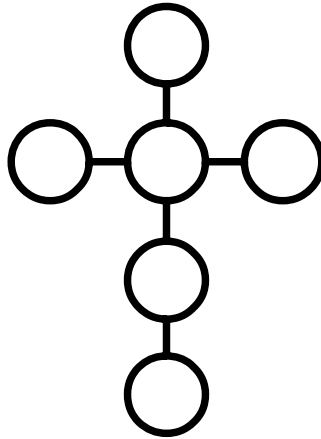
Power Lines (1)

Place each number in a circle so that all the numbers in the same straight line add up to the power line total.



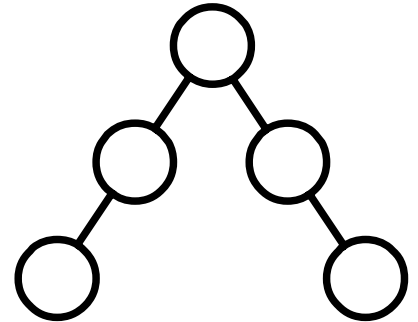
Use 1, 2, 4, 5, 6

Power Line total = 11



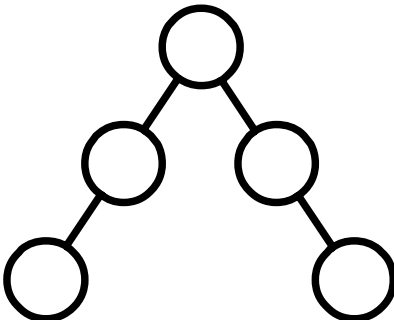
Use 2, 4, 6, 8, 10, 12

Power Line total = 24



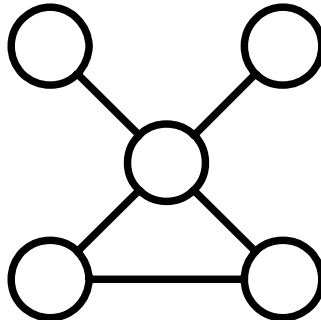
Use 4, 6, 8, 10, 12

Power Line total = 26



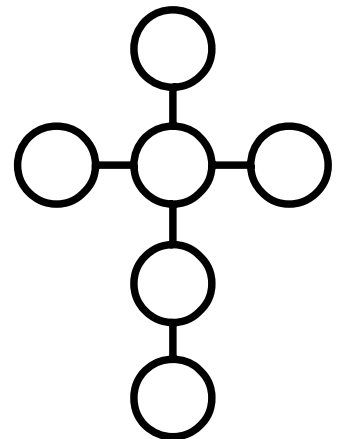
Use 14, 21, 28, 35, 42

Power Line total = 91



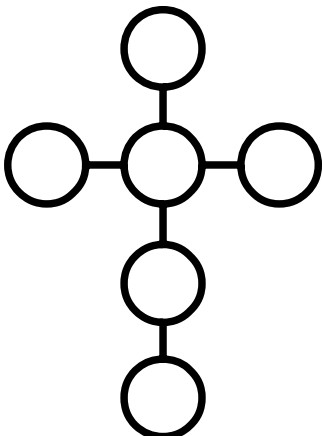
Use 9, 18, 36, 45, 54

Power Line total = 99



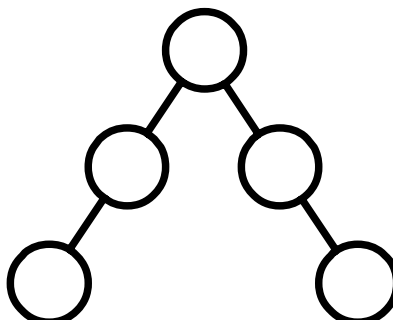
Use 9, 18, 27, 36, 45, 54

Power Line total = 108



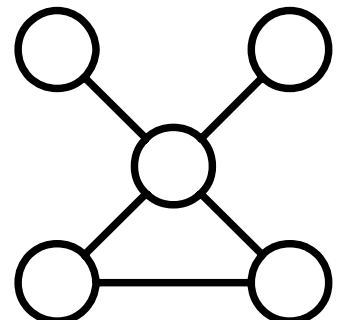
Use 10, 20, 30, 40, 50, 60

Power Line total = 120



Use 10, 15, 20, 25, 30

Power Line total = 65



Use 7, 14, 28, 35, 42

Power Line total = 77