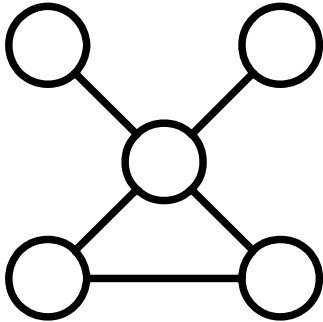


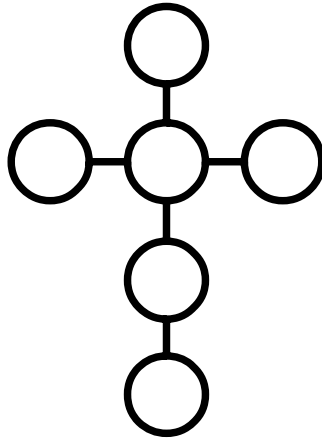
Power Lines (1)

Place each number in a circle so that all the numbers in the same straight line add up to the power line total.



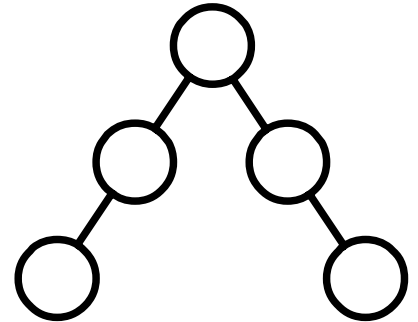
Use 10, 20, 40, 50, 60

Power Line total = 110



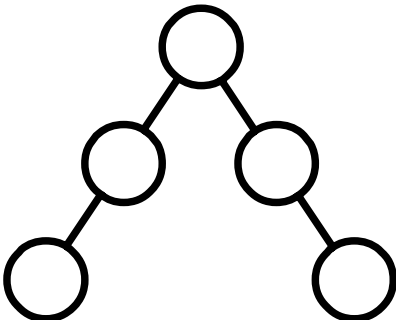
Use 9, 18, 27, 36, 45, 54

Power Line total = 108



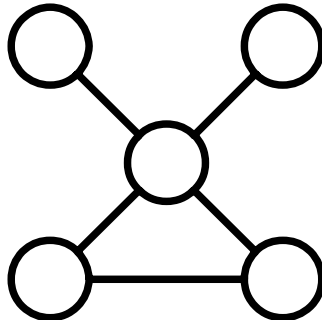
Use 10, 15, 20, 25, 30

Power Line total = 65



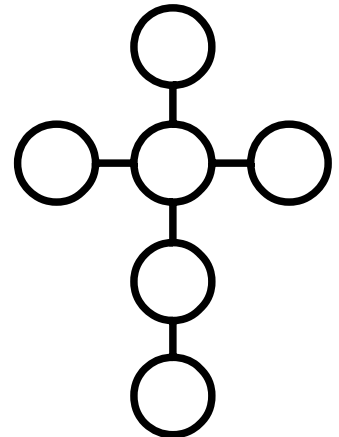
Use 14, 21, 28, 35, 42

Power Line total = 91



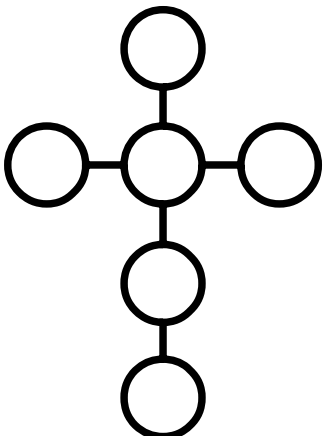
Use 9, 18, 36, 45, 54

Power Line total = 99



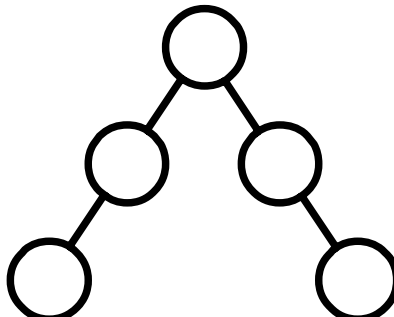
Use 7, 14, 21, 28, 35, 42

Power Line total = 84



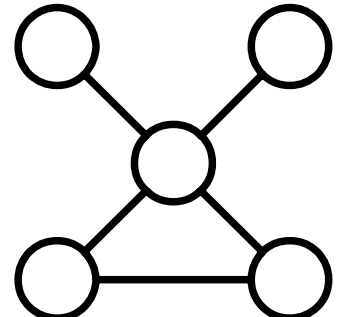
Use 10, 20, 30, 40, 50, 60

Power Line total = 120



Use 4, 6, 8, 10, 12

Power Line total = 26



Use 5, 10, 20, 25, 30

Power Line total = 55