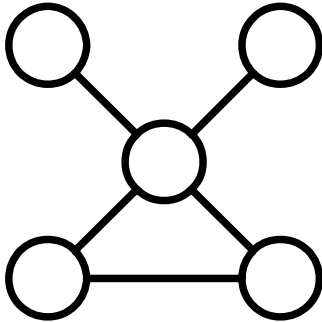


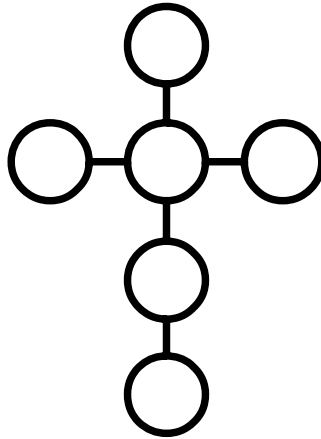
# Power Lines (1)

Place each number in a circle so that all the numbers in the same straight line add up to the power line total.



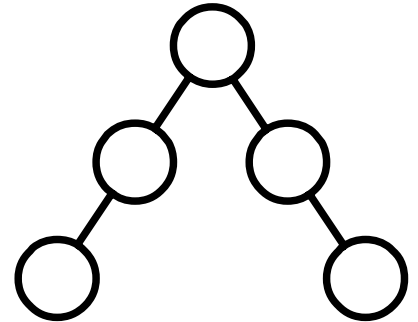
Use 1, 2, 4, 5, 6

Power Line total = 11



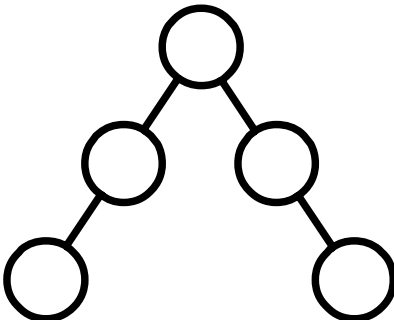
Use 1, 2, 3, 4, 5, 6

Power Line total = 12



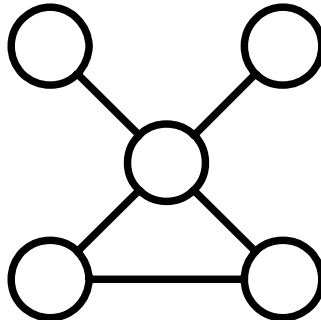
Use 20, 30, 40, 50, 60

Power Line total = 130



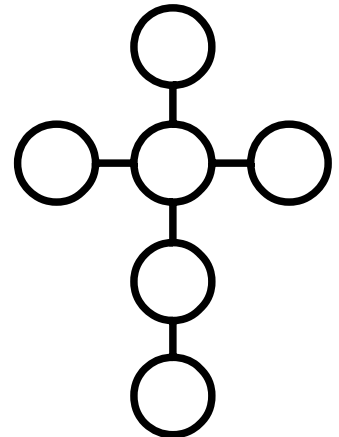
Use 18, 27, 36, 45, 54

Power Line total = 117



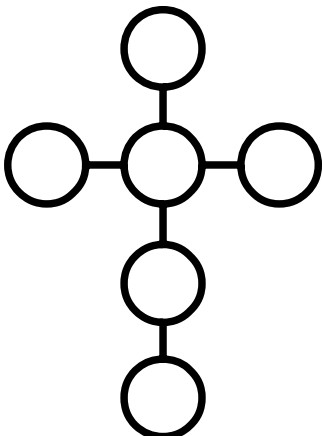
Use 4, 8, 16, 20, 24

Power Line total = 44



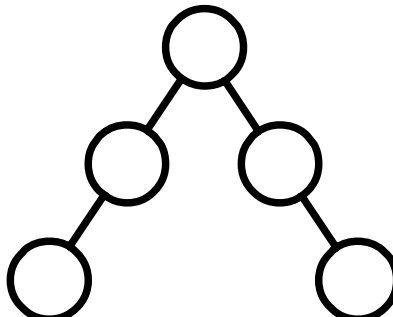
Use 10, 20, 30, 40, 50, 60

Power Line total = 120



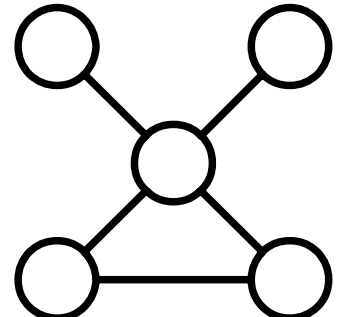
Use 3, 6, 9, 12, 15, 18

Power Line total = 36



Use 12, 18, 24, 30, 36

Power Line total = 78



Use 2, 4, 8, 10, 12

Power Line total = 22